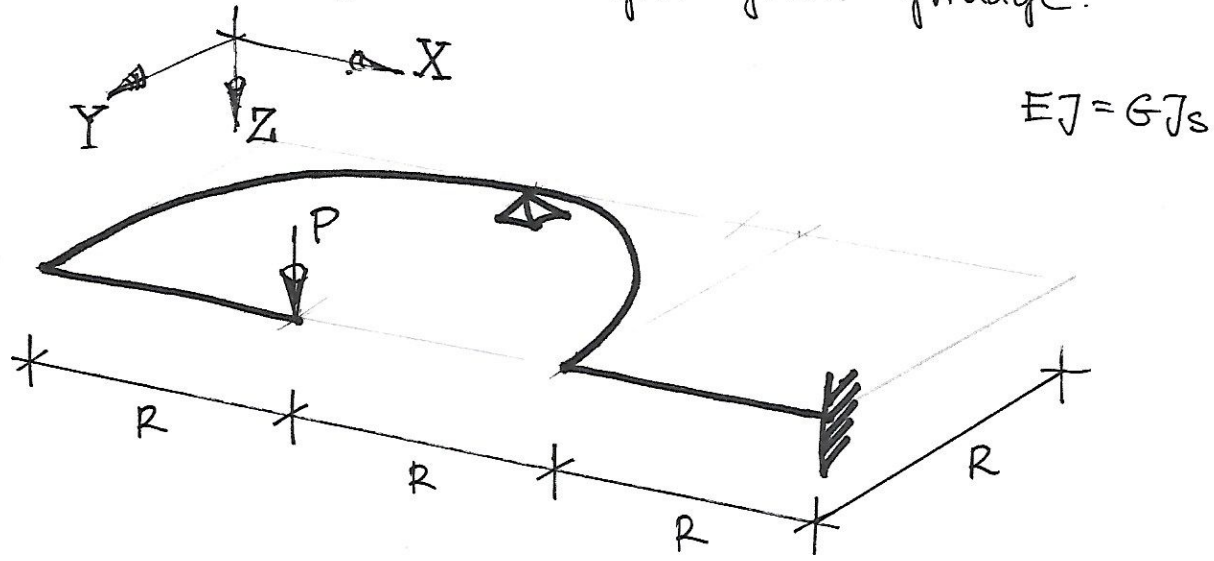


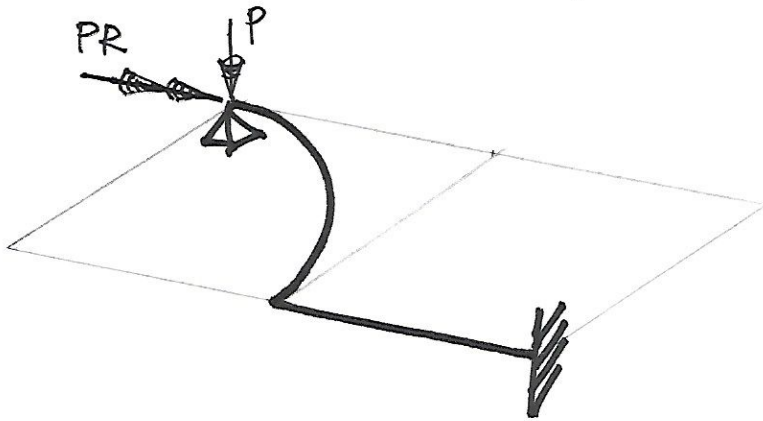
Mechanics of Structures, Civil Engineering Structures

Test 1.1 27 March 2018

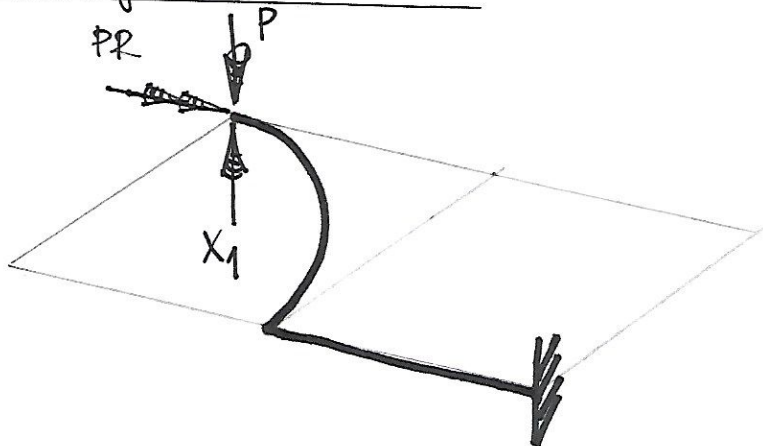
Find reactions in a rigid-joint grillage.



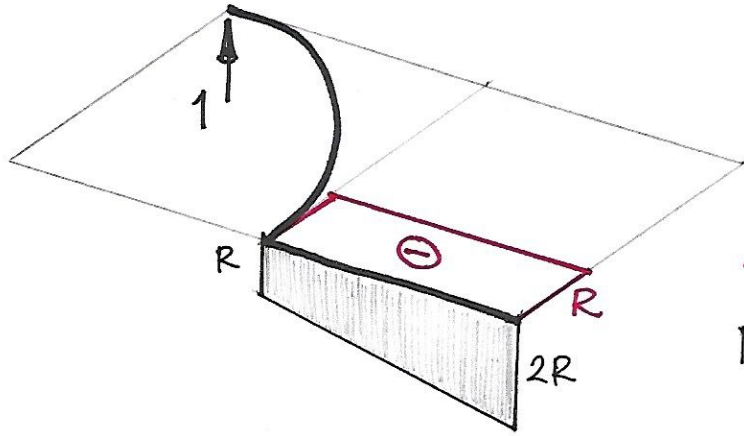
Note that the original problem reduces to the following:



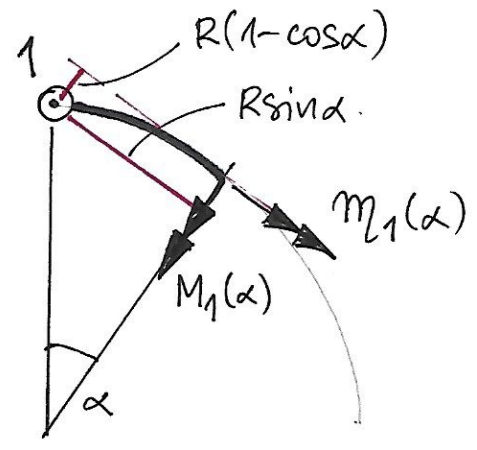
Primary structure:



$X_1=1$ Load case



M_1



Bending and twisting moment diagrams for the straight part of the grillage.

Equilibrium of the curved part of the grillage.

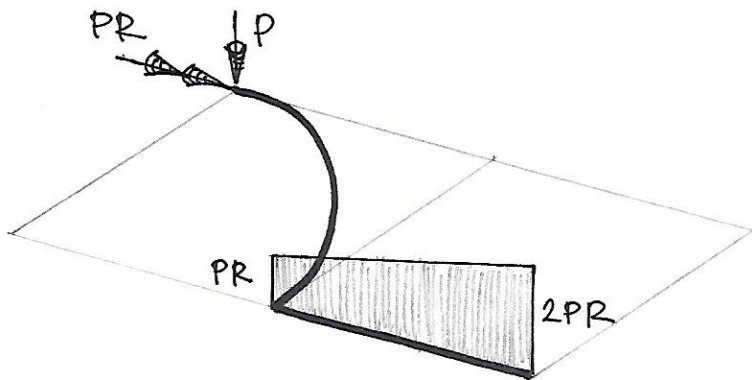
From the equilibrium equations for the curved part:

$$M_1(\alpha) - 1 \cdot R \sin \alpha = 0$$

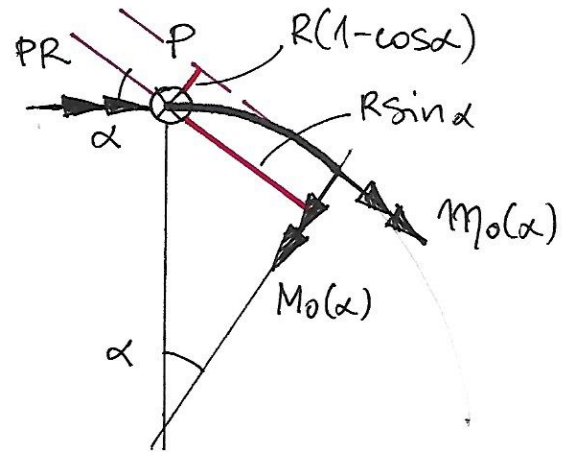
$$m_1(\alpha) - 1 \cdot R(1 - \cos \alpha) = 0$$

$$\alpha \in (0, \frac{\pi}{2})$$

"0" load case



M_0
 $M_0 = 0$



Diagrams for the straight part of the grillage.

Loads and internal forces acting on the curved part of the grillage.

From the equilibrium equations for the curved part:

$$M_0(\alpha) + P \cdot R \sin \alpha - PR \cdot \sin \alpha = 0$$

$$m_0(\alpha) + P \cdot R(1 - \cos \alpha) + PR \cdot \cos \alpha = 0$$

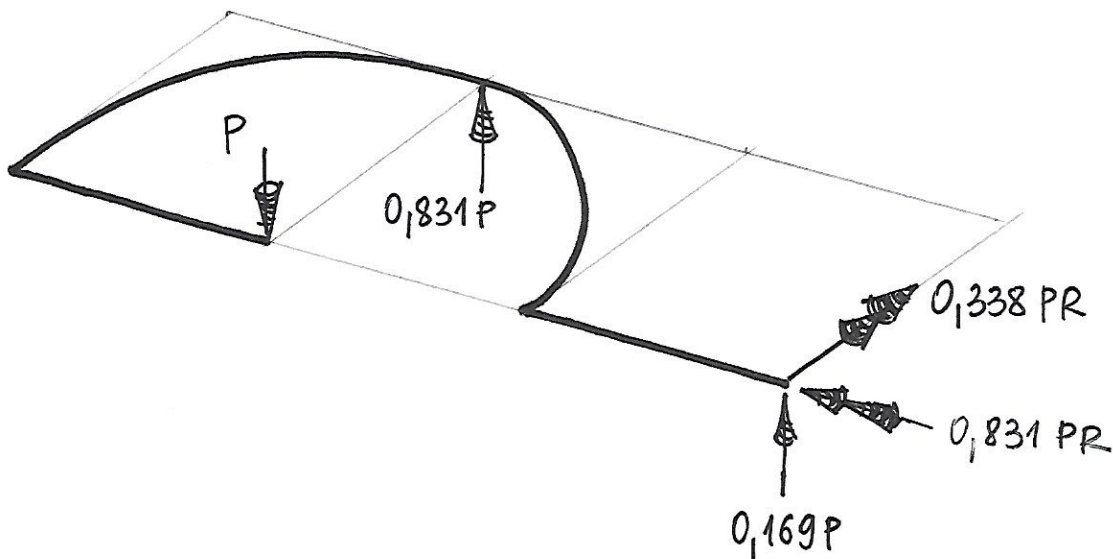
Calculations:

$$\delta_{11} = \left(\frac{13}{3} + \frac{\pi}{2} \right) \frac{R^3}{EJ} \approx 5,904 \frac{R^3}{EJ}$$

$$\delta_{10} = - \left(\frac{10}{3} + \frac{\pi}{2} \right) \frac{PR^3}{EJ} \approx -4,904 \frac{PR^3}{EJ}$$

$$X_1 = 0,831 P$$

Reactions:



Note:

$$\delta_{11} X_1 + \delta_{10} = 0$$

$$\delta_{11} = \frac{1}{EJ} \left\{ [M_1^2 + m_1^2]_{\text{straight parts}} + \int_0^{\frac{\pi}{2}} [M_1^2 + m_1^2] R d\alpha \right\}$$

$$\delta_{10} = \frac{1}{EJ} \left\{ [M_1 M_0 + m_1 m_0]_{\text{straight parts}} + \int_0^{\frac{\pi}{2}} [M_1 M_0 + m_1 m_0] R d\alpha \right\}$$