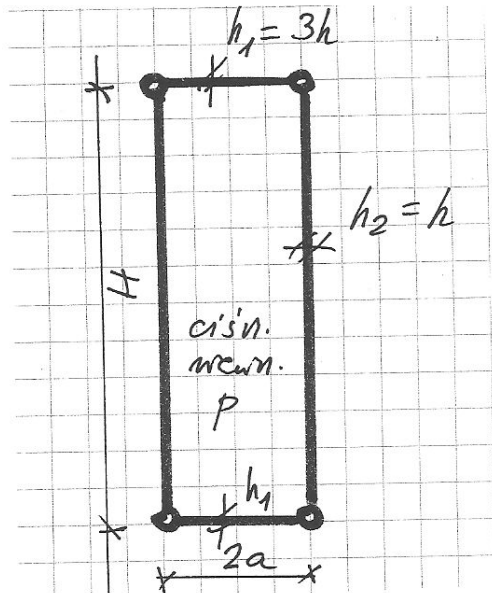


NAZWISKO Imię		
Nr albumu		Ocena z ćwiczeń projektowych
ocena zadania 1	ocena zadania 2	Ocena z egzaminu po ustnym
		Ocena łączna, data, podpis

**Zadanie 1.**

Dany jest zbiornik walcowy zamknięty z obu stron płytami kołowymi. Przyjąć, że zbiornik jest długi.

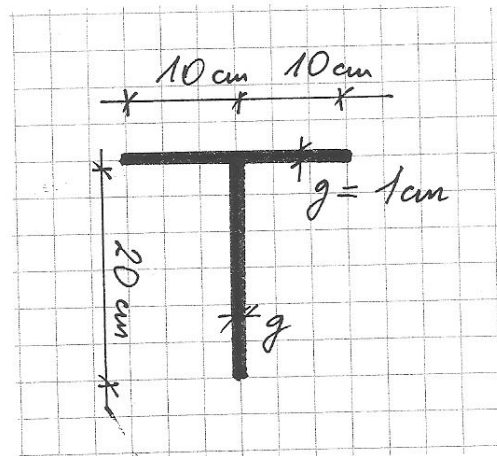
Znaleźć siły wewnętrzne  $N_1, N_2, M_1, M_2$  w powłoce. Przyjąć  $E=30$  GPa, wsp. Poissona=0.2.



$$h = a/15$$

**Zadanie 2.** Znaleźć siłę krytyczną P (przyłożoną w środku ciężkości SC przekroju) wybożenia giętnoskrętnego pręta cienkościennego o danym przekroju, podpartego widełkowo, o długości  $l = 3.0$  m.

Charakterystyki geometryczne wyznaczyć samodzielnie. Przyjąć  $E=205$  GPa; wsp. Poissona=0.3.



**Exam on the Mechanics of Structures**  
**7.09.2015**

PROBLEM #1

Consider a cylindrical shell closed by circular plates and loaded by an internal pressure  $p$ . Assume that the shell is long.

Calculate the internal forces  $N_1, N_2, M_1, M_2$  in a cylinder.

Assume the Young modulus  $E = 30\text{GPa}$ , Poisson ratio  $\nu = 0.2$ .  
See front page for shell dimensions.

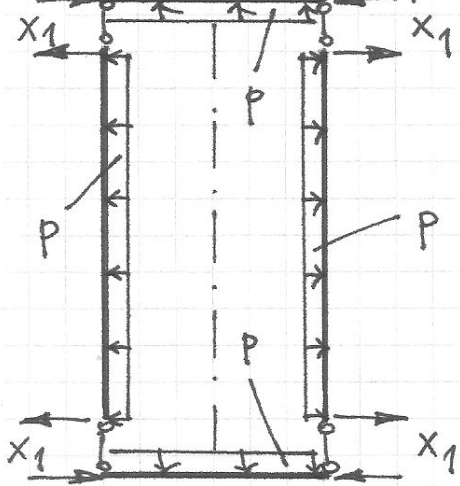
PROBLEM #2

Consider a thin-walled beam of length  $l = 3.0\text{m}$ , fork-supported and loaded by a force  $P$  applied at cross-section's centroid  $SC$ .

Calculate the value of the force  $P$  critical for flexural-torsional buckling.

Assume the Young modulus  $E = 30\text{GPa}$  and Poisson ratio  $\nu = 0.3$ .  
See front page for cross-section dimensions.  
Calculate the geometrical characteristics.

Schemat zastępczy / Primary structure



Symetria / Symmetry

$$\lambda^4 = 3(1-\nu^2) \left(\frac{a}{h}\right)^2$$

$$C = \frac{Eh}{1-\nu^2}$$

$$D = \frac{Eh^3}{12(1-\nu^2)}$$

WALEC  
CYLINDER

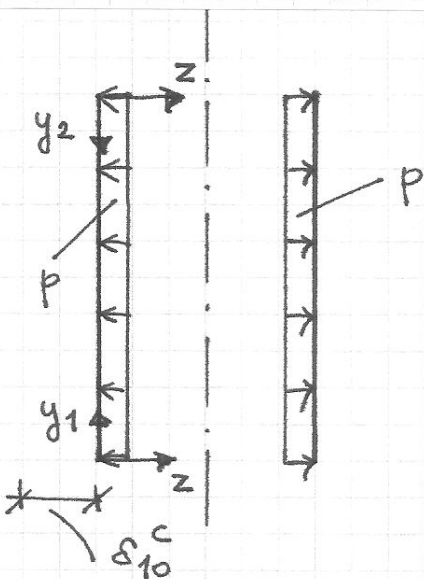
$$C = \frac{3Eh}{1-\nu^2}$$

$$D = \frac{27Eh^3}{12(1-\nu^2)}$$

PLYTA  
PLATE

(A) Walec / Cylinder

- Stan bezgięciowy (stan "0") / Non-bending state ("0"-th state)



$$\xi_1 = \frac{y_1}{a}$$

$$\xi_2 = \frac{y_2}{a}$$

$$w(\xi_i) = A_1 e^{-\lambda \xi_i} \cos(\lambda \xi_i) + A_2 e^{-\lambda \xi_i} \sin(\lambda \xi_i) + w_0 \quad i=1,2$$

$$\lambda^4 = 3(1-\nu^2) \left(\frac{a}{h}\right)^2$$

$$w_0 = -\frac{pa^2}{Eh_1}$$

$$\delta_{10}^c = -w_0 = \frac{pa^2}{Eh_1}$$

$$M_{10}^c(\xi_i) = 0$$

$$M_{20}^c(\xi_i) = 0$$

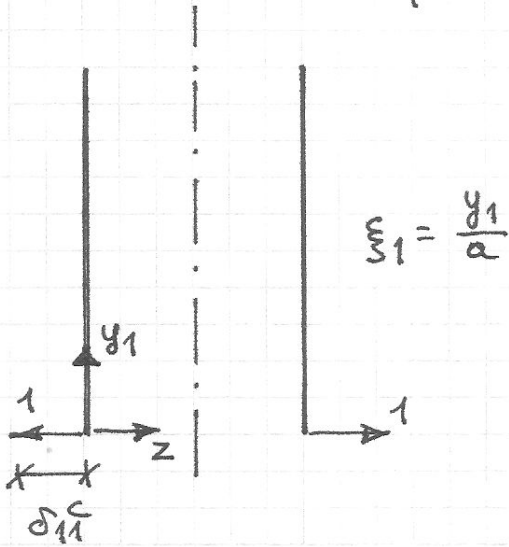
$$N_{10}^c(\xi_i) = -\frac{Eh_1}{a} w(\xi_i) = pa$$

$$N_{20}^c = \frac{1}{2} pa$$

patrz PLYTA

see PLATE

• Zaburzenie  $X_1=1$  / Perturbation  $X_1=1$



Rozpatrujemy zaburzenie na dolnej krawedzi. Zaburzenie na gornej krawedzi wywołuje efekt symetryczny.

Here we consider the perturbation applied to the lower edge. Perturbation applied to the top edge cause symmetric effect.

$$w(\xi_1) = e^{-\lambda \xi_1} [A_1 \cos(\lambda \xi_1) + A_2 \sin(\lambda \xi_1)]$$

war. brzegowe / boundary conditions

$$Q_2(0) = 1, \quad M_2(0) = 0 \quad \rightarrow \quad A_1, A_2$$

$$M_{11}^C(\xi_i) = \nu M_{21}^C(\xi_i)$$

$$M_{21}^C(\xi_i) = \frac{a}{\lambda} \cdot e^{-\lambda \xi_i} \sin(\lambda \xi_i)$$

$$N_{11}^C(\xi_i) = 2\lambda \cdot e^{-\lambda \xi_i} \cos(\lambda \xi_i)$$

$$\delta_{11}^C = \frac{2a\lambda}{Eh_1}$$

$$N_{21}^C(\xi_i) = 0$$

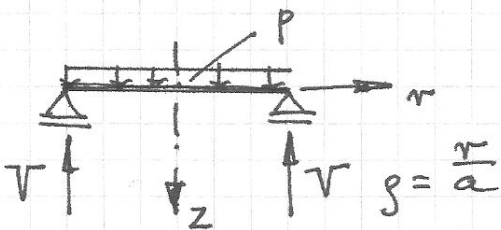
$$\xi_2 = \frac{H}{a} - \xi_1$$

$$\xi_i \in \{\xi_1, \xi_2\}$$

### (B) PŁYTA / PLATE

• Stan "0"

"0"-th state



Rozpatrujemy płytę dolną.

Zadruwanie się płyty górnej jest symetryczne.

We consider the lower plate only.

The upper plate bends symmetrically.

$$V = N_{20}^C = \frac{p \cdot \pi a^2}{2\pi a} = \frac{1}{2} pa$$

$$w(s) = A_1 + A_2 s^2 + \frac{q R^4}{64 D} s^4$$

warunki brzegowe / boundary conditions

$$w(1) = 0$$

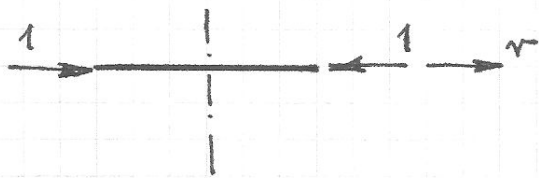
$$M_2(1) = 0 \quad \rightarrow \quad A_1, A_2$$

$$\delta_{10}^P = 0$$

$$M_{10}^P(s) = \frac{pa^2}{16} [(3+\nu)(1-s^2) + 2(1-\nu)s^2]$$

$$M_{20}^P(s) = \frac{pa^2}{16} (3+\nu)(1-s^2)$$

• Zaburzenie  $X_1=1$  / Perturbation  $X_1=1$



$$s = \frac{r}{a}$$

$$u(s) = A_1 s$$

war. brzożone / boundary conditions

$$N_2(1) = -1 \rightarrow A_1$$

$$\delta_{11}^P = -u(1) = \frac{a(1-\nu)}{Eh_2}$$

$$M_{21}^P(s) = 0$$

$$M_{22}^P(s) = 0$$

$$N_{11}^P(s) = -1$$

$$N_{21}^P(s) = -1$$

Ⓒ OBLICZENIE  $X_1$  / CALCULATION OF  $X_1$

$$\delta_{11} = \delta_{11}^C + \delta_{11}^P = \frac{2a\lambda}{Eh_1} + \frac{a(1-\nu)}{Eh_2} = \frac{2a\lambda}{Eh} + \frac{a(1-\nu)}{3Eh}$$

$$\delta_{10} = \delta_{10}^P = \frac{pa^2}{Eh_1} = \frac{pa^2}{Eh}$$

$$X_1 = -\frac{\delta_{10}}{\delta_{11}}$$

Ⓓ OBLICZENIE  $N_1, N_2, M_1, M_2$

CALCULATION OF  $N_1, N_2, M_1, M_2$

Walec / cylinder

$$N_1^C(\xi_1) = \left[ N_{11}^C(\xi_1) + N_{11}^C\left(\frac{H}{a} - \xi_1\right) \right] \cdot X_1 + N_{10}^C(\xi_1)$$

$$N_2^C(\xi_1) = N_{20}^C(\xi_1)$$

$$M_1^C(\xi_1) = \nu M_2^C(\xi_1)$$

$$M_2^C(\xi_1) = \left[ M_{21}^C(\xi_1) + M_{21}^C\left(\frac{H}{a} - \xi_1\right) \right] \cdot X_1 + M_{20}^C(\xi_1)$$

$$N_1^P(s) = N_{11}^P(s) \cdot X_1$$

$$N_2^P(s) = N_{21}^P(s) \cdot X_1$$

$$M_1^P(s) = M_{10}^P(s)$$

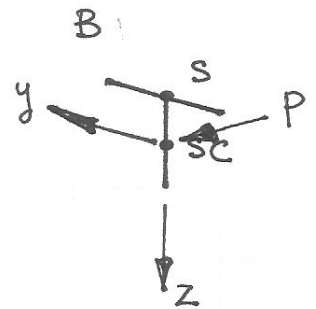
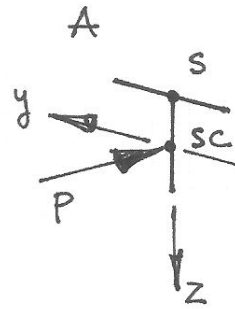
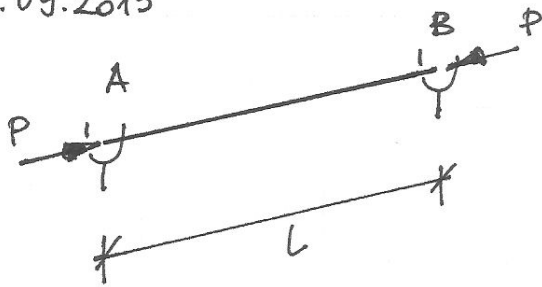
$$M_2^P(s) = M_{20}^P(s)$$

Płyta / plate

Problem #2

Zadanie 2

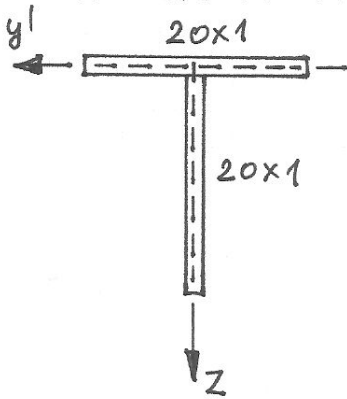
7.09.2015



Cechą charakterystyczną przekroju teowego jest  $w=0$  oraz  $J_w=0$ .  
The main feature of a T-section is  $w=0$  and  $J_w=0$ .

Należy wyznaczyć pozostałe charakterystyki geometryczne.

We need to calculate all other geometrical characteristics.



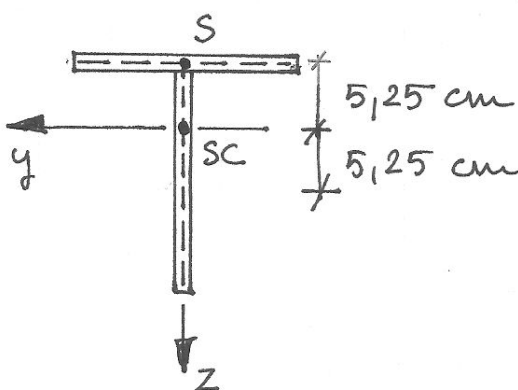
$$A = 40 \text{ cm}^2$$

$$J_S = \frac{1}{3} \cdot 20 \cdot 1^3 \cdot 2 = 13,33 \text{ cm}^4$$

$$S_z = 0$$

$$S_{y'} = 1 \cdot 20 \cdot 10,5 = 210 \text{ cm}^3$$

$$z_{SC} = \frac{S_{y'}}{A} = 5,25 \text{ cm}$$



$$J_z = \frac{1}{12} [1 \cdot 20^3 + 20 \cdot 1^3] = 668,33 \text{ cm}^4$$

$$J_y = \left[ \frac{1}{12} \cdot 20 \cdot 1^3 + 20 \cdot (5,25)^2 + \frac{1}{12} \cdot 1 \cdot 20^3 + 20 \cdot (5,25)^2 \right] = 1770,83 \text{ cm}^4$$

$$z_s = -5,25 \text{ cm}$$

$$y_s = 0$$

$$E = 205 \text{ GPa} = 20500 \frac{\text{kN}}{\text{cm}^2}$$

$$E_1 = \frac{E}{1-\nu^2} = 22527 \frac{\text{kN}}{\text{cm}^2}$$

$$\nu = 0,3$$

$$G = \frac{E}{2(1+\nu)} = 7885 \frac{\text{kN}}{\text{cm}^2}$$

$$L = 300 \text{ cm}$$

$$(r_0)^2 = \frac{J_z + J_y}{A} + (z_s)^2 + (y_s)^2 = 76,34 \text{ cm}^2$$

$$\beta_2 = \left(\frac{z_s}{r_0}\right)^2 = 0,36$$

$$P_2 = \frac{\pi^2 E_1 J_z}{L^2} = 1651 \text{ kN}$$

$$P_y = \frac{\pi^2 E_1 J_y}{L^2} = 4375 \text{ kN}$$

$$P_s = \frac{1}{(r_0)^2} \left[ GJ_s + \frac{\pi^2 E_1 J_w}{L^2} \right] = 1377 \text{ kN}$$

Teraz obliczamy  $P_{kr}$  (krytyczne).

Now we calculate  $P_{kr}$  (critical value).

$$\det [A(P)] = 0 \rightarrow P = P_{kr}$$

$$A(P) = \begin{bmatrix} P - P_2 & 0 & z_s P \\ 0 & P - P_y & 0 \\ z_s P & 0 & (r_0)^2 (P - P_s) \end{bmatrix}$$

$$\det [A(P)] = (r_0)^2 \cdot (P - P_y) \cdot W_2(P) = (r_0)^2 \cdot (P - P_y) \cdot (P - P_1) \cdot (P - P_2) \cdot (1 - \beta_2)$$

$$W_2(P) = (1 - \beta_2)P^2 - (P_2 + P_s)P + P_2 P_s$$

$P_1, P_2$  - pierwiastki wielomianu  $W_2(P)$  / roots of the polynomial  $W_2(P)$

$$P_1 = \frac{P_2 + P_s - \sqrt{\Delta}}{2(1 - \beta_2)}$$

$$P_2 = \frac{P_2 + P_s + \sqrt{\Delta}}{2(1 - \beta_2)}$$

$$\Delta = (P_2 + P_s)^2 - 4(1 - \beta_2)P_2 P_s$$

$$P_1 = 935 \text{ kN}$$

$$P_2 = 3803 \text{ kN}$$

$$P_{kr} = \min \{ P_1, P_2, P_y \} = P_1 = 935 \text{ kN.}$$