

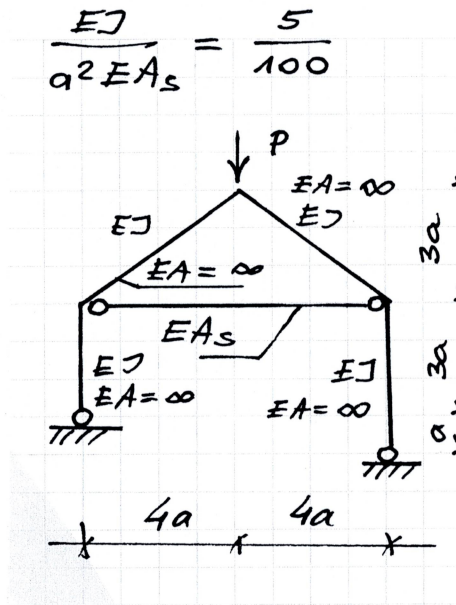
Egzamin pisemny z Mechaniki Konstrukcji I, 4 IX 2023 r.

NAZWISKO imię				
Grupa	Data zaliczenia ćwiczeń		Numer albumu	
Ocena zadania 1	Ocena zadania 2	Ocena zadania 3	Ocena z egzaminu (po egz. ustnym)	Ocena łączna
				Data

Zadanie 1

Dana jest rama płaska obciążona jak na rysunku. Sporządzić wykres momentów zginających metodą sił.

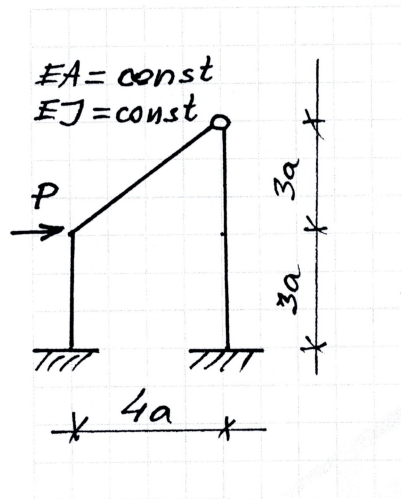
(Problem 1. Given is the frame loaded as shown in the figure. Construct the diagram of the bending moments)



Zadanie 2

Dana jest rama płaska jak na rysunku. Utworzyć układ równań macierzowej metody przemieszczeń.

(Problem 2. Given is the plane frame as in the figure; write down the equations of the displacement method in the matrix form)



Zadanie 3

Dany jest pręt prosty pryzmatyczny. Wprowadzić równanie transformacyjne schematu z dwoma utwierdzeniami:

$$(1) \Phi_i = \frac{2EJ}{l} (2\varphi_i + \varphi_k - 3\psi) + \Phi_i^o$$

i wykazać następnie, że ten związek spełnia kryterium ruchu sztywnego.

(Problem 3. Given is a straight prismatic bar. Derive the slope-deflection equation (1) for a scheme with two clamped ends and then prove that this formula satisfies the rigid body criterion.)

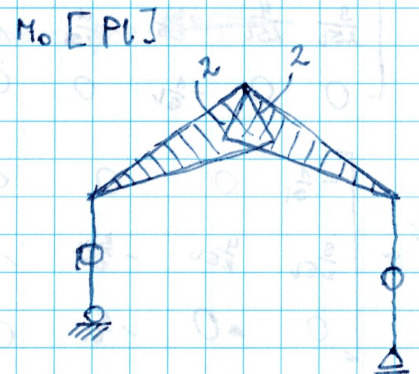
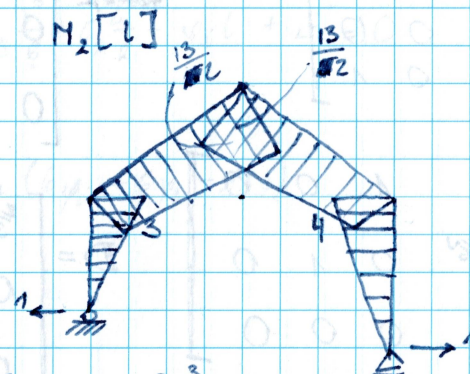
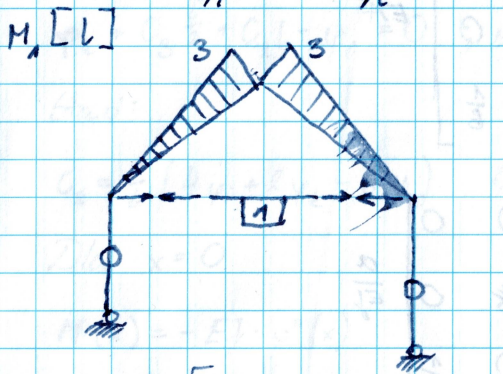
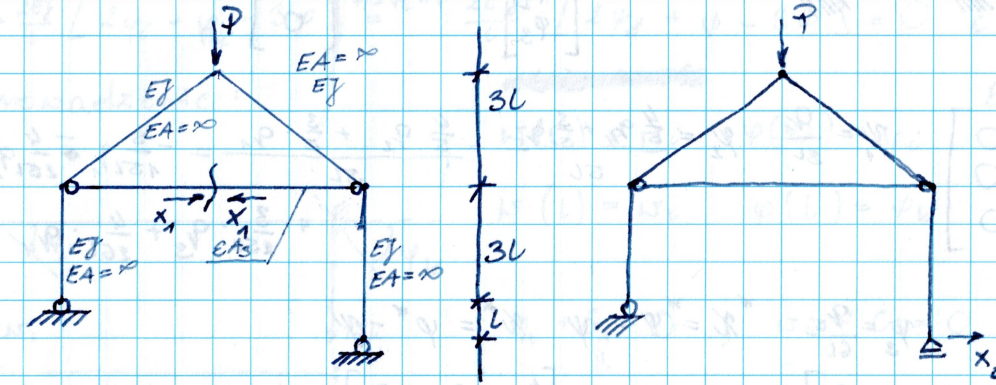
Egzamin pisemny

Mechanika Konstrukcyjna

04.09.2023r.

Zadanie 1.

$$\frac{EI}{a^2 EA_s} = \frac{5}{100}$$



$$\delta_{10} = -\frac{1}{EI} \left[2 \cdot \left(\frac{1}{2} \cdot 2PL \cdot 5L \cdot \frac{2}{3} \cdot 3L \right) \right] = -20 \frac{PL^3}{EI}$$

$$\delta_{20} = \frac{1}{EI} \left[\frac{1}{2} \cdot 2PL \cdot 5L \cdot \left(\frac{1}{3} \cdot 3L + \frac{2}{3} \cdot \frac{13}{12} L \right) + \frac{1}{2} \cdot 2PL \cdot 5L \cdot \left(\frac{1}{3} \cdot 4L + \frac{2}{3} \cdot \frac{13}{12} L \right) \right] = 55 \frac{PL^3}{EI}$$

$$\delta_{11} = \frac{1}{EI} \left[2 \cdot \left(\frac{1}{2} \cdot 3L \cdot 5L \cdot \frac{2}{3} \cdot 3L \right) \right] + \frac{1}{EA} [1 \cdot 1 \cdot 8L] = 30 \frac{L^3}{EI} + \frac{8}{20} \frac{L^3}{EI} = \frac{152}{5} \frac{L^3}{EI}$$

$$\delta_{12} = \delta_{21} = -\frac{1}{EI} \left[\frac{1}{2} \cdot 3L \cdot 5L \cdot \left(\frac{1}{3} \cdot 3L + \frac{2}{3} \cdot \frac{13}{12} L \right) + \frac{1}{2} \cdot 3L \cdot 5L \cdot \left(\frac{1}{3} \cdot 4L + \frac{2}{3} \cdot \frac{13}{12} L \right) \right] = -\frac{165}{2} \frac{L^3}{EI}$$

$$\delta_{22} = \frac{1}{EI} \left[\frac{1}{12} \cdot 3L \cdot 3L \cdot \frac{4}{3} \cdot 3L + \frac{1}{2} \cdot 3L \cdot 5L \cdot \left(\frac{2}{3} \cdot 3L + \frac{1}{3} \cdot \frac{13}{12} L \right) + \frac{1}{2} \cdot \frac{13}{12} L \cdot 5L \cdot \left(\frac{1}{3} \cdot 3L + \frac{2}{3} \cdot \frac{13}{12} L \right) + \frac{1}{2} \cdot \frac{13}{12} L \cdot 5L \cdot \left(\frac{2}{3} \cdot \frac{13}{12} L + \frac{1}{3} \cdot 4L \right) + \frac{1}{2} \cdot 4L \cdot 5L \cdot \left(\frac{2}{3} \cdot 4L + \frac{1}{3} \cdot \frac{13}{12} L \right) + \frac{1}{2} \cdot 4L \cdot 4L \cdot \frac{2}{3} \cdot 4L \right] =$$

$$= \frac{866}{3} \frac{L^3}{EI}$$

$$D = \begin{bmatrix} \delta_{11} & \delta_{12} \\ \delta_{12} & \delta_{22} \end{bmatrix} \quad d_0 = \begin{bmatrix} \delta_{10} \\ \delta_{20} \end{bmatrix}$$

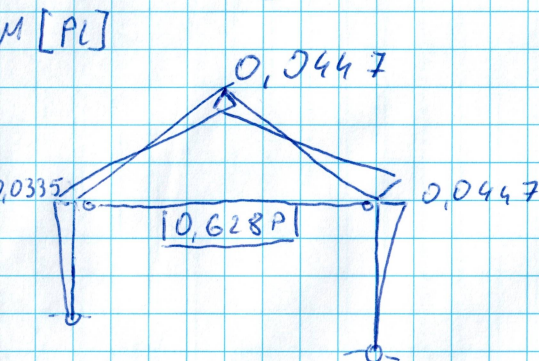
$$DX + d_0 = 0$$

$$\frac{152}{5} \frac{L^3}{EI} \cdot X_1 - \frac{165}{2} \frac{L^3}{EI} \cdot X_2 = 20 \frac{PL^3}{EI}$$

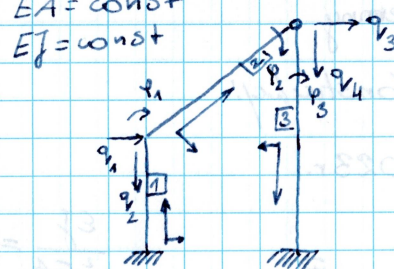
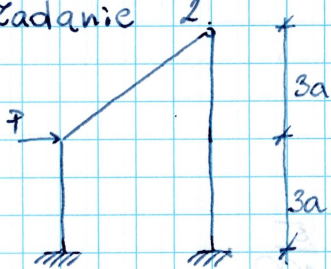
$$-\frac{165}{2} \frac{L^3}{EI} \cdot X_1 + \frac{866}{3} \frac{L^3}{EI} \cdot X_2 = -55 \frac{PL^3}{EI}$$

$$X_1 = 0,628 P$$

$$X_2 = \ominus 0,0112 P$$



Zadanie 2



$$q = \begin{bmatrix} q_1 \\ q_2 \\ q_3 \\ q_4 \\ q_5 \\ q_6 \\ q_7 \\ q_8 \end{bmatrix}$$

$$Q = \begin{bmatrix} P \\ 0 \\ 0 \\ 0 \\ 0 \\ 0 \\ 0 \\ 0 \end{bmatrix}$$

$$B = \begin{bmatrix} \frac{1}{4a} & 0 & 0 & 0 & 0 & 0 & 0 & 0 \\ 0 & -1 & 0 & 0 & 0 & 0 & 0 & 0 \\ -\frac{4}{5} & \frac{3}{5} & \frac{4}{5} & -\frac{3}{5} & 0 & 0 & 0 & 0 \\ 0 & 0 & 0 & -1 & 0 & 0 & 0 & 0 \end{bmatrix}$$

$$\psi_1 = \frac{q_1}{3L} \quad \psi_2 = \frac{\frac{4}{5}q_4 + \frac{3}{5}q_5}{5L} = \frac{\frac{4}{5}q_4 + \frac{3}{5} \cdot q_1}{5L} = -\frac{3}{15L}q_1 + \frac{4}{15L}q_4 + \frac{3}{25L}q_5 + \frac{4}{25L}q_4$$

$$B = \begin{bmatrix} -\frac{1}{3L} & 0 & 0 & 0 & 0 & 0 & 0 \\ \frac{3}{25L} & \frac{4}{25L} & -\frac{3}{25L} & -\frac{4}{25L} & 1 & 0 & 0 \\ 0 & 0 & -\frac{1}{6L} & 0 & 0 & 0 & 1 \end{bmatrix}$$

$$\chi = \varphi - \psi \quad \chi^* = \varphi^* - \psi$$

$$E = \begin{bmatrix} \frac{1}{3} & 0 & 0 \\ 0 & \frac{1}{5} & 0 \\ 0 & 0 & \frac{1}{6} \end{bmatrix} \frac{a}{EA}$$

$$B^* = \begin{bmatrix} -\frac{1}{3L} & 0 & 0 & 0 & 1 & 0 & 0 \\ \frac{3}{25L} & \frac{4}{25L} & -\frac{3}{25L} & -\frac{4}{25L} & 0 & 1 & 0 \\ 0 & 0 & -\frac{1}{6L} & 0 & 0 & 0 & 0 \end{bmatrix}$$

$$D = \begin{bmatrix} \frac{1}{3} & 0 & 0 \\ 0 & \frac{1}{5} & 0 \\ 0 & 0 & \frac{1}{3} \end{bmatrix} \frac{a}{EI}$$

$$K = B^T E B + 2 B^* D B^* + B^* D B^* + B^{*T} P^* B + 2 B^{*T} D B^*$$

$$q = K^{-1} \cdot Q$$

$$M = E B q$$

$$^* \Phi = D (2^* B q + B^* \cdot q)$$

$$\Phi^* = D (^* B q + 2 B^* q)$$

Zadanie 3.

Ruch sztywny: $w_k = w_i + \psi \cdot l$, wtedy $\varphi_i = \varphi_k = \psi$

Kryterium ruchu sztywnego mówi, że sił wewnętrznych się na nim zsumuje, więc:

$$\Phi_i = \frac{2EJ}{l} [2\varphi_i + \varphi_k - 3\psi] \stackrel{\varphi_i = \varphi_k = \psi}{=} \frac{2EJ}{l} \cdot [2\psi + \psi - 3\psi] = 0 \text{ c. k. d.}$$


Nyrowadzenie:

~~.....~~

$$EJ w''''(x) = 0$$

$$w(0) = w_i \quad \varphi(0) = \varphi_i$$

$$w(l) = w_k \quad \varphi(l) = \varphi_k$$



$$\varphi_i + C_1 = 0 \quad ; \quad w_i + C_0 = 0$$

$$C_1 = -\varphi_i \quad ; \quad C_0 = -w_i$$

$$\varphi_k + C_3 \frac{l^2}{2} + C_2 l - \varphi_i = 0 \quad ; \quad w_k + C_3 \frac{l^3}{6} + C_2 \frac{l^2}{2} - \varphi_i l + w_i = 0$$

$$\text{oraz } \psi = \frac{w_k - w_i}{l}$$

Stąd:

$$C_2 = \frac{1}{l} (4\varphi_i + 2\varphi_k - 6\psi) \quad C_3 = \frac{1}{l^2} (6\varphi_i + 6\varphi_k - 12\psi)$$

Dla $x=0$

$$M(x) = -EJ \cdot w''(x)$$

$$w''(0) + C_3 \cdot 0 + C_2 = 0 \Rightarrow w''(0) = -C_2$$

$$\Phi_i = -M(0) = -EJ(-C_2) = \frac{EJ}{l} (4\varphi_i + 2\varphi_k - 6\psi) = \frac{2EJ}{l} \cdot (2\varphi_i + \varphi_k - 3\psi)$$